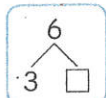


6は いくつと いくつ

6



6が6こあります。


かくしている かずを あてましょう。



5 と



3 と



と




と




と

いくつと いくつで 6になるかな。


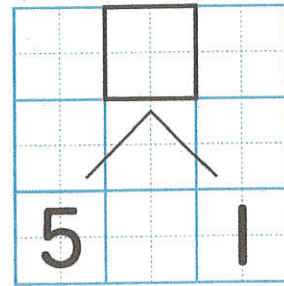
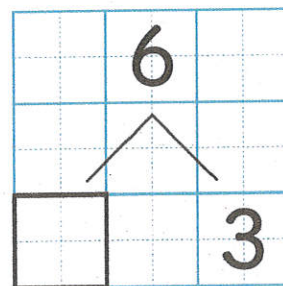


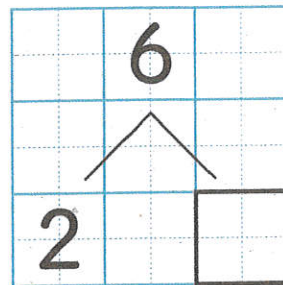


○○○○○●




●○○○○○

6は いくつと いくつに わけられるかな?

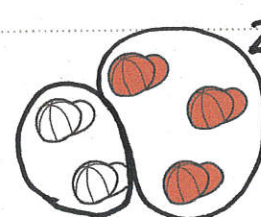


かぞえよう




3と3で...

6




2と()で




5と()で



3と()で



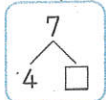

2と()で



2と()で


7は いくつと いくつ

7




が 7こ あります。

かくしている かずを あてましょう。




5 と 2




と



と





と



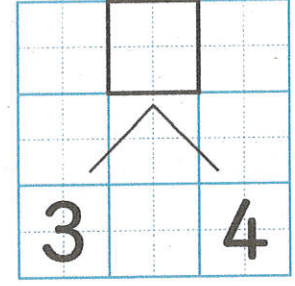




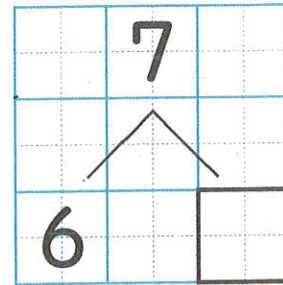
と



と




7は いくつと
いくつに
わけられるかな？





かぞえよう

2と5で...

6と()で...



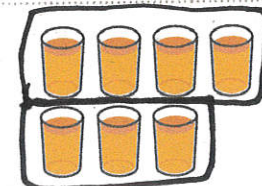
リク




3と()で...



3と()で...



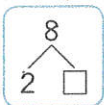
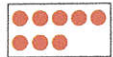
4と()で...



3と()で...

8はいくつといくつ

8



5と3で8。



2まで8にしましょう。

5 と 3

2 と

7 と

4 と

1 と

6 と

3 と

むすかしいときは
ぶろくをつかって かんがえよう。

8

5 3

8

 5

8

7

8は
いくつと
いくつに
わけられるかな。

8

2

8

6

8

1

8

 4





8

 3

3 5

かぞえよう

3と()で...



()と()で...
ほとんどわけかたが
できるかな。

